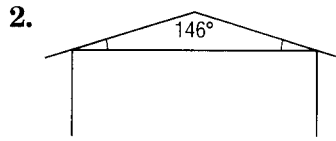


4-2 Skills Practice

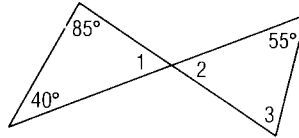
Angles of Triangles

Find the missing angle measures.



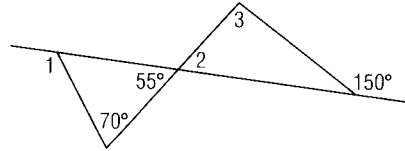
Find the measure of each angle.

- 3. $m\angle 1$
- 4. $m\angle 2$
- 5. $m\angle 3$



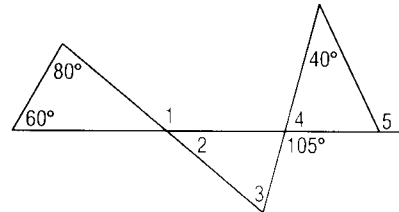
Find the measure of each angle.

- 6. $m\angle 1$
- 7. $m\angle 2$
- 8. $m\angle 3$



Find the measure of each angle.

- 9. $m\angle 1$
- 10. $m\angle 2$
- 11. $m\angle 3$
- 12. $m\angle 4$
- 13. $m\angle 5$



Find the measure of each angle.

- 14. $m\angle 1$
- 15. $m\angle 2$

